

SAMPLE

Score: _____/19

1-4. What time is it?

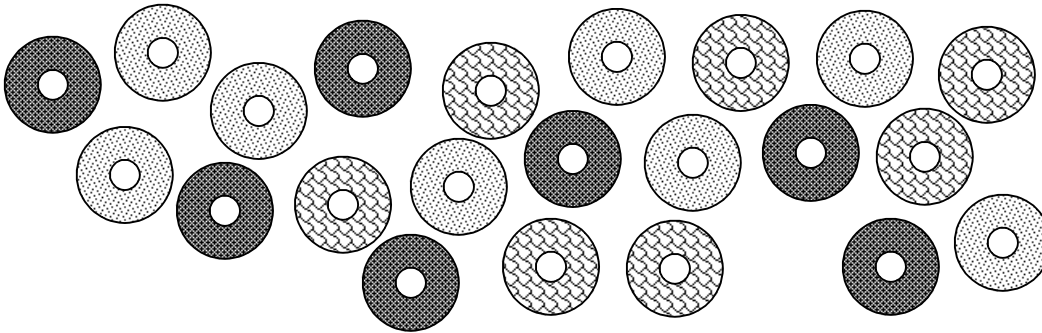



5. Count the number of windows in your home. _____

6. How many dining chairs are in your home? _____

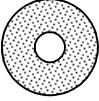
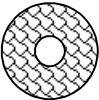
7. How many steps in the staircase(s) are in your home? _____

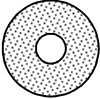

See the donuts below and answer questions:



8. How many  donuts are there? _____

9. How many donuts are  and  ? _____

10. How many  and  donuts are there? _____

11. How many  and  donuts are there? _____

12. How many donuts in all? _____

13. Write down the numbers from 11 to 19.




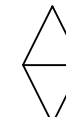
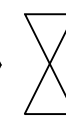
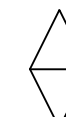
14. How many times did you write 1 above? _____

15-18. What comes next?

18, 20, 22, _____, _____, _____

A1, B2, C3, _____, _____, _____

      _____

      _____

19. Arrange these numbers from largest to smallest.

34, 45, 23, 50 _____