

SAMPLE

Score: _____/19

1. How many popcorn packs are these? _____




2. How many pizzas are these? _____



3. Which is more, pizza or popcorn? _____


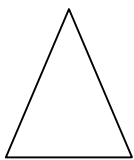
4. How many total pizzas and popcorn are there? _____

5. How many hamburgers are these? _____



6. Is that more or less than the popcorns? _____

7-9. Which shapes are these? Color them.



10. Read these numbers.

- | | | | |
|----|----|----|---|
| 16 | 12 | 18 | 3 |
| 7 | 9 | 5 | 4 |
| 14 | 20 | 1 | 0 |

11. What is your house number? _____

12. Circle the smaller number, 15 or 5 .

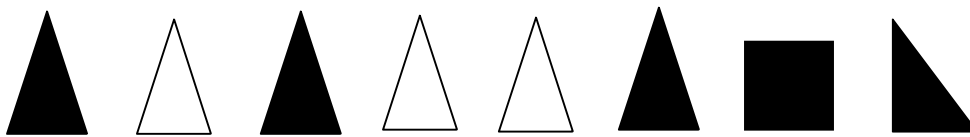
13. Circle the smaller number, 17 or 7 .

14. Circle the smaller number, 11 or 14 .

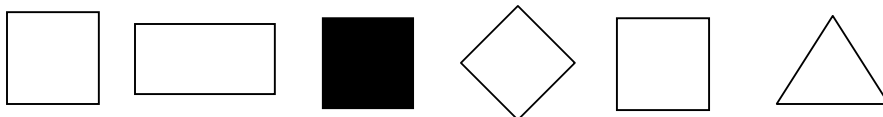
15. Circle the smaller number, 12 or 22 .

16. Circle the smaller number, 19 or 29 .

17. How many black triangles are there? _____



18. How many squares are white? _____



19. How many circles are gray? _____

